


Lesson 3 Chilli Challenges

Green Chilli

3b. Complete the bar model to show how much money Gino has left.



V+

4b. Take away £1 and 20p from the amount below. How much is left?

Pounds	Pence
= £4	= 70p

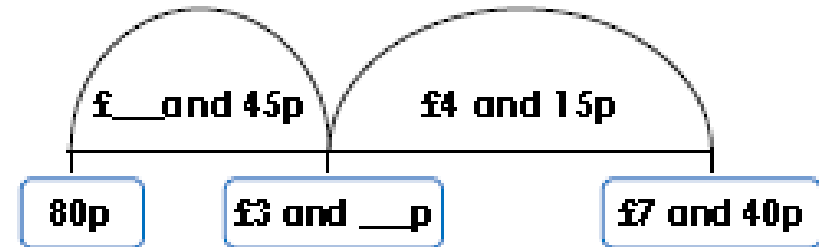
= £__ and __p



V+

Orange Chilli

5b. Complete the missing numbers on the number line.



V+

6b. Sophie likes two items in the gift shop.



How much less does the paint set cost?
£__ and __p

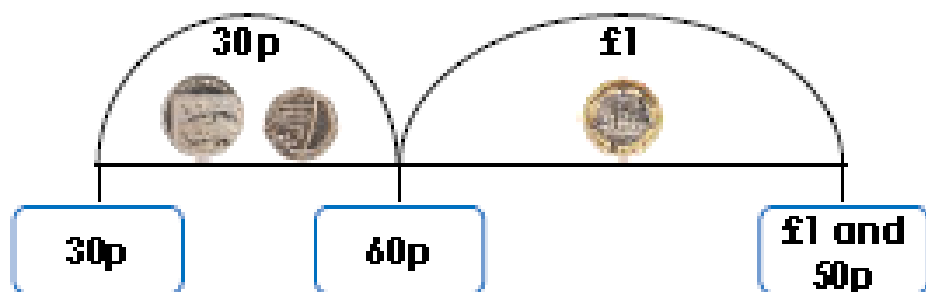


V+

2a. Gracie says,



I have £1 and 50p and I spend £1 and 30p on a drink. This means I will have 30p left.




Explain the mistake Gracie has made.



PS

3a. Find possible values of the hidden digits. Complete the subtraction, without exchanges, using all of the cards below.



£ and 0p – £ and 0p = £5 and 30p



PS