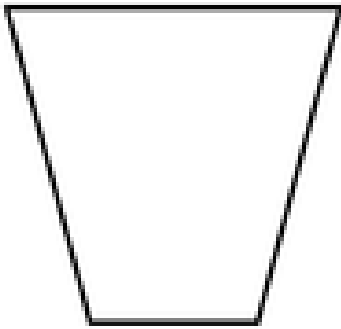
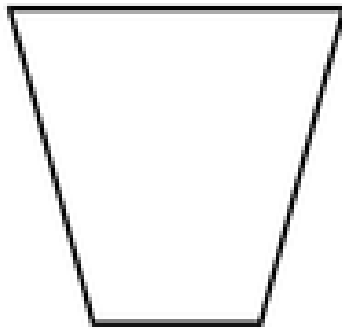


## Capacity Challenge 4

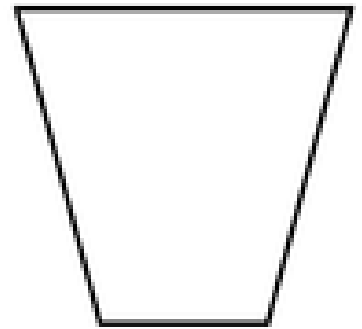
Draw a line on each cup to show the correct amount and colour in the amount.



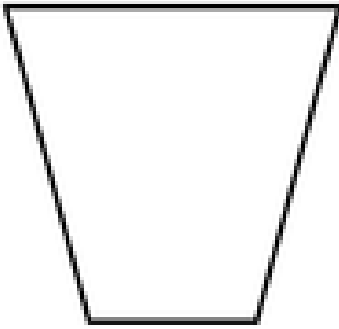
full



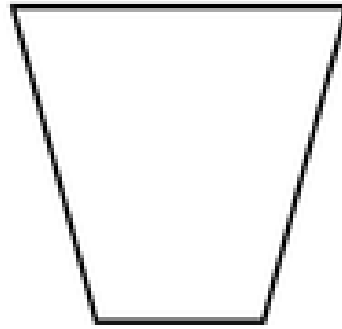
half full



empty



nearly full



nearly empty

Which container has the smallest capacity? **Circle one.**



Which container has the greatest capacity? **Circle one.**



Which container has the greatest capacity? **Circle one.**



Which container has the smallest capacity? **Circle one.**






Challenge question:

Put these amounts in order by putting the number of each container in the correct box.



Put them in order from empty to full.



empty

full