





Yellow Chilli Challenge

Draw Accurately

4. Measure these lines to the nearest mm. Which line is the odd one out?

| | |
|----------|------------------------------------------------------------------------------------|
| A |  |
| B |  |
| C |  |
| D |  |



VF
HW/Ext

5. All the lines below have been ordered from shortest to longest. Draw lines B and D. to complete them and then write the measurements for all the lines in the boxes.

| | | |
|----------|--------------------------------------------------------------------------------------|---------------------------------------------------------------------------------------------------------------------------------------------------------------------------|
| A |  | <input style="border: 1px solid purple; padding: 2px 10px;" type="text" value="cm"/> <input style="border: 1px solid purple; padding: 2px 10px;" type="text" value="mm"/> |
| B |  | <input style="border: 1px solid purple; padding: 2px 10px;" type="text" value="cm"/> <input style="border: 1px solid purple; padding: 2px 10px;" type="text" value="mm"/> |
| C |  | <input style="border: 1px solid purple; padding: 2px 10px;" type="text" value="cm"/> <input style="border: 1px solid purple; padding: 2px 10px;" type="text" value="mm"/> |
| D |  | <input style="border: 1px solid purple; padding: 2px 10px;" type="text" value="cm"/> <input style="border: 1px solid purple; padding: 2px 10px;" type="text" value="mm"/> |
| E |  | <input style="border: 1px solid purple; padding: 2px 10px;" type="text" value="cm"/> <input style="border: 1px solid purple; padding: 2px 10px;" type="text" value="mm"/> |



VF
HW/Ext

6. Jack has been measuring some lines.



All of my lines are longer than 3cm 5mm but shorter than 7cm 5mm.



Is he correct? Explain how you know.







RPS
HW/Ext

Red Chilli Challenge

Draw Accurately

7. Measure these lines to the nearest mm. Which line is the odd one out?

| A | B | C | D |
|-----------------------------------------------------------------------------------|-----------------------------------------------------------------------------------|------------------------------------------------------------------------------------|-------------------------------------------------------------------------------------|
|  |  |  |  |



VF
HW/Ext

8. All the lines below have been ordered from shortest to longest. Draw lines B and D to complete them and then write the measurements for all the lines in the boxes.



cm mm

cm mm

cm mm

cm mm


cm mm

VF
HW/Ext

9. Gemma has been measuring pairs of lines.



The total length of each pair of lines is longer than 6cm 1mm.



Is she correct? Explain how you know.



RPS
HW/Ext