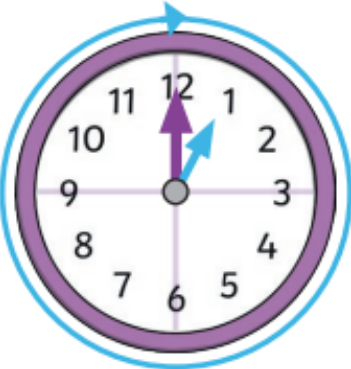






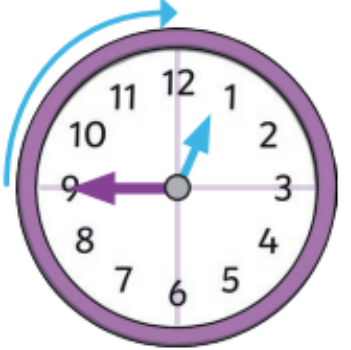



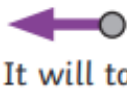
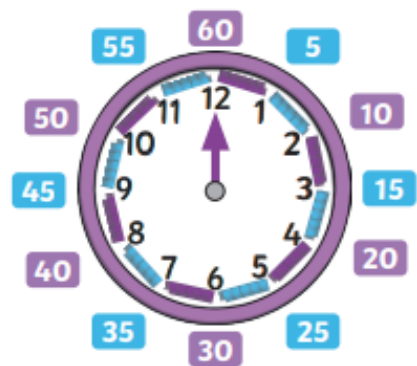
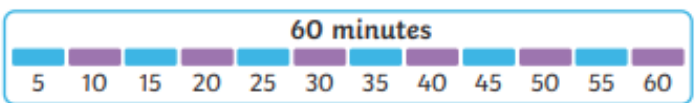


Key Vocabulary	O'Clock	Half Past		
time	 <div data-bbox="450 683 741 759">1 o'clock</div>	 <div data-bbox="1361 683 1653 759">half past 12</div>		
clock			 <p>It takes one hour for the hour hand to turn from the number showing this hour and the number showing the next hour.</p>	 <p>It takes half an hour for the hour hand to turn halfway between the number showing this hour and the number showing the next hour.</p>
hours			 <p>It takes the minute hand an hour to make a whole turn around the clock.</p>	 <p>It takes half an hour for the minute hand to turn halfway around the clock.</p>
minutes				
hand				
o'clock				
half past	Quarter Past	Quarter To		
quarter past	 <div data-bbox="450 1394 741 1471">quarter past 12</div>	 <div data-bbox="1361 1394 1653 1471">quarter to 1</div>		
quarter to			 <p>It takes a quarter of an hour for the hour hand to turn a quarter of the way between the number showing this hour and the number showing the next hour.</p>	 <p>It will take the hour hand a quarter of an hour to reach the number representing the next hour.</p>
five minutes			 <p>It takes a quarter of an hour for the minute hand to turn a quarter of the way around the clock.</p>	 <p>It will take the minute hand a quarter of an hour to begin the new hour.</p>
duration				
shorter				
longer				

Minutes in an Hour

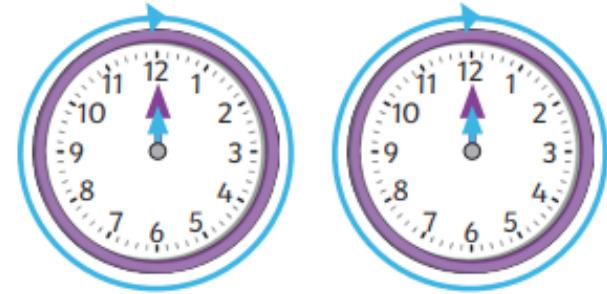


There are 60 minutes in one hour.



Hours in a Day

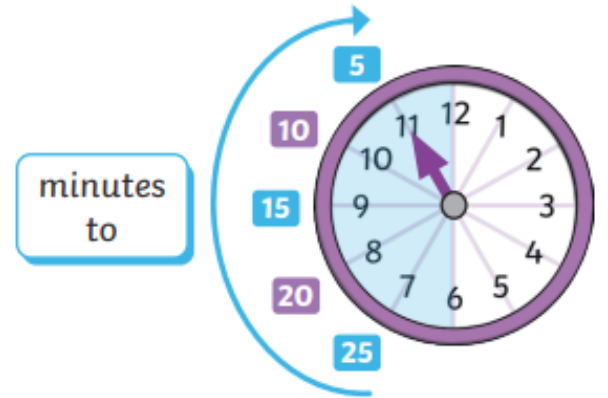
Each day, the hour hand makes 2 full turns around the clock.



Each whole turn takes 12 hours.
There are 24 hours in a day.

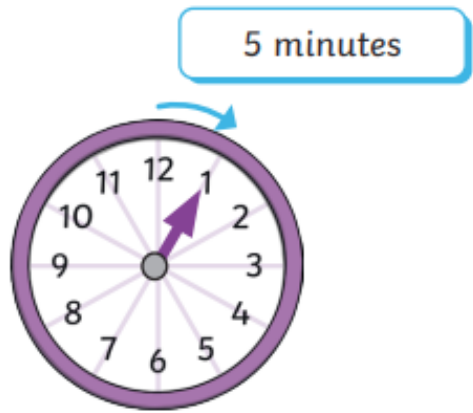


5 Minute Intervals to the Hour



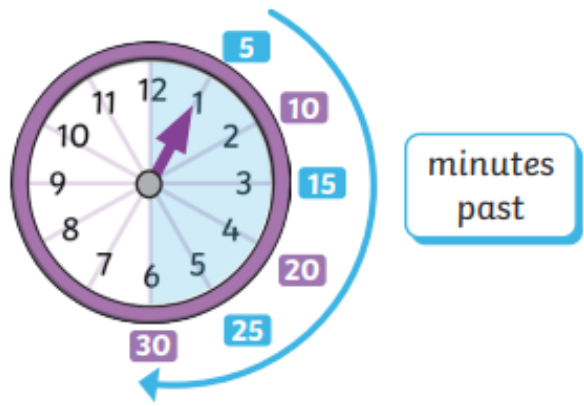
When the **minute hand** turns through the left side of the clock, it shows minutes **to** the next hour.

5 Minute Intervals



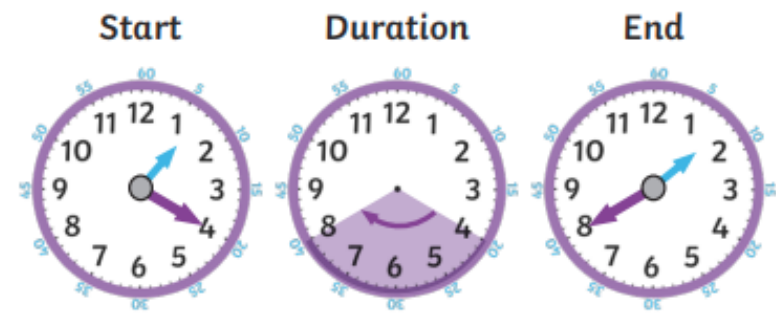
It takes five minutes for the **minute hand** to turn from one number to the next.

5 Minute Intervals past the Hour



When the **minute hand** turns through the right side of the clock, it shows minutes **past** the hour.

Find Durations of Time



20 minutes have passed.